






# Number Bonds to 10 Ten Frame


1.   
 $5 + \square = 10$

2.   
 $1 + \square = 10$


3.   
 $3 + \square = \square$


4.   
 $\square + \square = 10$

5.   
 $\square + 2 = \square$

6.   
 $\square + \square = 10$

Can you create your own?

7.   
 $\square + \square = \square$

  
 $\square + \square = \square$

# Number Bonds to 10 Ten Frame **Answers**

1.  $\boxed{5} + \boxed{5} = \boxed{10}$

2.  $\boxed{1} + \boxed{9} = \boxed{10}$

3.  $\boxed{3} + \boxed{7} = \boxed{10}$

4.  $\boxed{4} + \boxed{6} = \boxed{10}$

5.  $\boxed{8} + \boxed{2} = \boxed{10}$

6.  $\boxed{9} + \boxed{1} = \boxed{10}$

7.  $\boxed{2} + \boxed{8} = \boxed{10}$